



**MUSC 166 Entrance Test
Sample Paper 3
ANSWERS**


1) Insert the Correct time signatures at the beginning of the bars

a)  b) 

2) Copy out these bars correcting the rhythmic notation to conform with the time signatures.


a)  b) 

3) Write the required Tonic Triads with key signatures



C minor 2nd Inversion or A Major 1st Inversion or G Minor Root Position F Major 1st Inversion

4) Write the Harmonic version of the Scale of E Minor in the treble clef **with** Key Signature



Turn Over

5) Give a complete description of these intervals (eg Major 7th)

sample answer

major 7th Major 2nd Diminished 5th major 6th Perfect 4th major 3rd

6) Transcribe this piece into the Alto clef so that it sounds at the same pitch.

7) Write conventional chord indications under the chords of this piece and identify the two Cadences.

Chord or indications
I⁶ or I^c IV ii V I vi IV I

Cadences...1) Imperfect 2) Plagal.