



**MUSC 166 Entrance Test
Sample Paper 3
(Time allowed 1 hour)**

Name _____


1) Insert the Correct time signatures at the beginning of the bars

a)  b) 

2) Copy out these bars correcting the rhythmic notation to conform with the time signatures.

a)  b) 

3) Write the required Tonic Triads with key signatures



C minor
2nd Inversion
A Major
1st Inversion
G Minor
Root Position
F Major
1st Inversion

4) Write the Harmonic version of the Scale of E Minor in the treble clef **with** Key Signature

Turn Over

5) Give a complete description of these intervals (eg Major 7th)

sample answer

major 7th

6) Transcribe this piece into the Alto clef so that it sounds at the same pitch.

7) Write conventional chord indications under the chords of this piece and identify the two Cadences.

Chord indications _____

Cadences...1) 2).....